



# Five Little Ducks and Ponds Number Bonds of 5 Activity


Can you complete the number sentences?



$$\boxed{4} + \boxed{\phantom{00}} = \boxed{\phantom{00}}$$




$$\boxed{2} + \boxed{\phantom{00}} = \boxed{\phantom{00}}$$



$$\boxed{\phantom{00}} + \boxed{2} = \boxed{\phantom{00}}$$




$$\boxed{\phantom{00}} + \boxed{\phantom{00}} = \boxed{\phantom{00}}$$




$$\boxed{\phantom{00}} + \boxed{\phantom{00}} = \boxed{\phantom{00}}$$

# Five Little Ducks and Ponds Number Bonds of 5 Activity


Can you complete the number sentences?



$$\boxed{4} + \boxed{\phantom{00}} = \boxed{\phantom{00}}$$




$$\boxed{2} + \boxed{\phantom{00}} = \boxed{\phantom{00}}$$



$$\boxed{\phantom{00}} + \boxed{2} = \boxed{\phantom{00}}$$



$$\boxed{\phantom{00}} + \boxed{\phantom{00}} = \boxed{\phantom{00}}$$



$$\boxed{\phantom{00}} + \boxed{\phantom{00}} = \boxed{\phantom{00}}$$