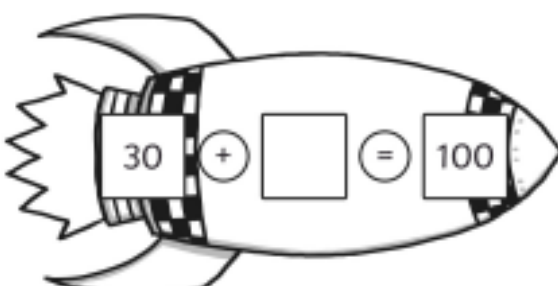
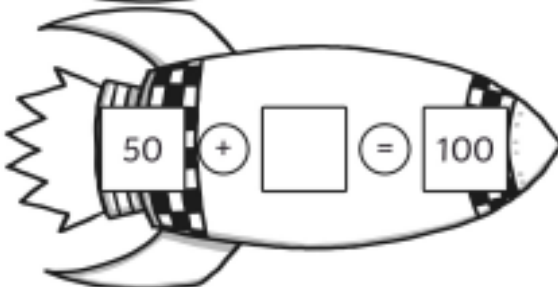
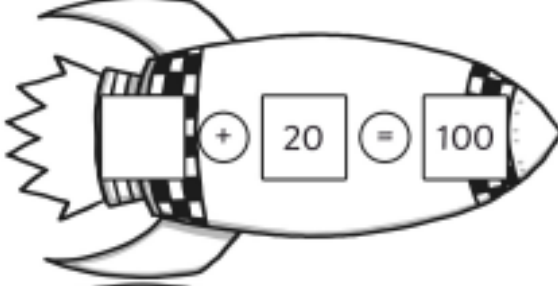
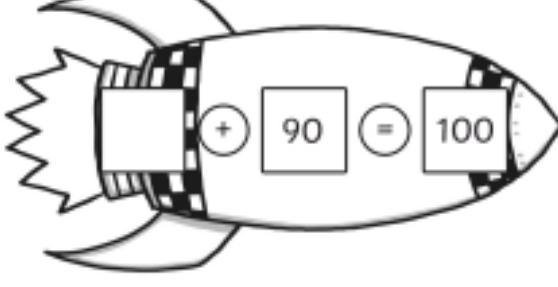
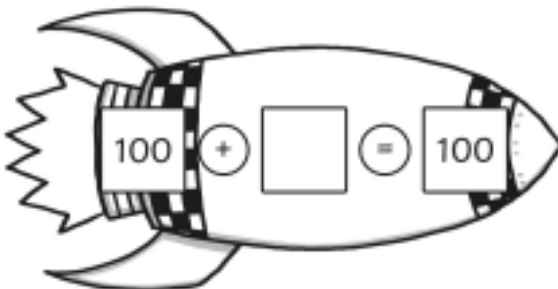


Rocket Race to 100

Can you find the missing numbers to make a total of 100?

1. 
 $30 + \square = 100$
2. 
 $50 + \square = 100$
3. 
 $\square + 20 = 100$
4. 
 $\square + 90 = 100$
5. 
 $100 + \square = 100$

Number Bonds of 100

Use known number facts to fill in the missing numbers on these bar models.

1.

100	
33	

2.

100	
	25

3.

100	
41	

4.

100	
	50

5.

100	
	7

6.

100	
30	

7.

100	
	45

8.

100	
10	

9.

100	
75	

10.

100	
72	