







1)	 <input type="text"/> + <input type="text"/> + <input type="text"/> + <input type="text"/> = <input type="text"/>
2)	What is the name of this coin? _____ 
3)	How much money is here?  = _____ pence
4)	Use <, > or = to complete the comparisons below. 
5)	
6)	
7)	What is the smallest amount you can make using any 3 silver coins? _____ pence
8)	If today is Monday 6th October. What was the date yesterday? _____
9)	Today is Wednesday 13th July. What will the date be tomorrow? _____
10)	What time is being shown on the clock? _____ o'clock 